


Chord Worksheet 1 – Major and minor chords


1. Write the tonic triad for each of the Major keys with the following key signatures. The first has been done for you.



2. Write the tonic triad for each of the harmonic minor keys with the following key signatures. The first has been done for you.



3. Write a Major triad on each of the given notes.



4. Write a minor triad on each of the given notes.



5. Write the following triads on the given staff, using accidentals where necessary.



A minor


A Major

D Major

E minor

Bb minor

6. Write the following triads on the given staff, using accidentals where necessary.



C Major

D minor

F Major

E Major

B minor