

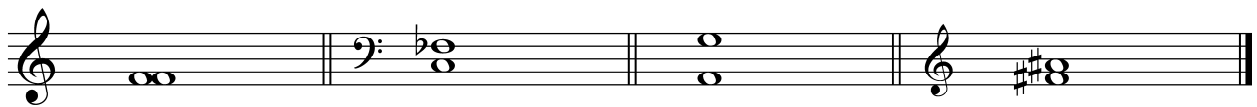
Music Theory Worksheet 1 Answers

Total Marks Available: 45

Intervals

Question 1


2 Marks – 1/2 mark for each correct answer



1. Perfect Unison 2. diminished 4th 3. minor 7th 4. Major 3rd

Question 2


4 Marks – 1 mark for each correct answer



1. minor 2nd 2. Perfect 5th 3. Major 7th 4. diminished 5th

Question 3

4 Marks – 1 mark for each correct answer



1. diminished 3rd 2. Major 6th 3. Perfect 8ve 4. Augmented 2nd

Music Theory Worksheet 1

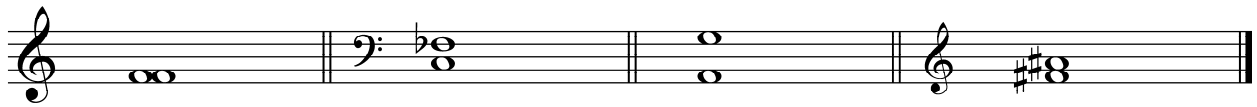
Name: _____

Intervals

Question 1

Identify the size and quality of each interval from the alternatives listed.

minor 2nd Perfect Unison minor 7th Major 3rd Perfect 4th diminished 4th minor 6th



1.


2.

3.

4.

Question 2

Identify the size and quality of each of the following intervals.



1.


2.

3.

4.

Question 3

Identify the size and quality of each interval.



1.

2.

3.

4.

Question 4

Write the specified interval above or below the given note as indicated.



Perfect 4th
above

Major 2nd
below

minor 6th
above

Augmented 7th
below

minor 3rd
above

Question 5

- a. Identify the size and quality of the opening and closing intervals that are bracketed in the melody written below.



Opening interval _____

Closing interval _____

- b. Identify the tonality of the above melody (notated **without** a key signature) by circling the correct alternative from the list below.

Major

Mixolydian mode

melodic minor

dorian mode